

DEFENCE ORIENTED SSB AND PERSONALITY DEVELOPMENT PROGRAM

OMR SHEET

Name _____

Date _____

Time limit 20 min / 30 Questions

INSTRUCTIONS

1. Use blue/black ball point pen only.
2. Use of pencil on the OMR answer sheet is prohibited.
3. Do not mark anything on the OMR sheet.
4. Do not fold the OMR Sheet.
5. Make sure that you put your signature and date below the answer sheet IN THE PROVIDED BOX ONLY.
6. Darken the circle properly leaving no space. Don't put a tick mark or a cross mark where it is specified that you fill the bubbles completely. Half-filled or over-filled bubbles will not be read by the software.



A B C D E F G H I J K L M N O P Q R S T U V W X Y Z

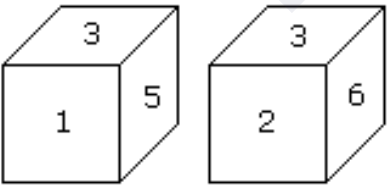
- | | | |
|------------------------|---------------------|---------------------|
| 1. (a) (b) (c) (d) | 11. (a) (b) (c) (d) | 21. (a) (b) (c) (d) |
| 2. (a) (b) (c) (d) | 12. (a) (b) (c) (d) | 22. (a) (b) (c) (d) |
| 3. (a) (b) (c) (d) | 13. (a) (b) (c) (d) | 23. (a) (b) (c) (d) |
| 4. (a) (b) (c) (d) (e) | 14. (a) (b) (c) (d) | 24. (a) (b) (c) (d) |
| 5. (a) (b) (c) (d) | 15. (a) (b) (c) (d) | 25. (a) (b) (c) (d) |
| 6. (a) (b) (c) (d) | 16. (a) (b) (c) (d) | 26. (a) (b) (c) (d) |
| 7. (a) (b) (c) (d) | 17. (a) (b) (c) (d) | 27. (a) (b) (c) (d) |
| 8. (a) (b) (c) (d) | 18. (a) (b) (c) (d) | 28. (a) (b) (c) (d) |
| 9. (a) (b) (c) (d) | 19. (a) (b) (c) (d) | 29. (a) (b) (c) (d) |
| 10. (a) (b) (c) (d) | 20. (a) (b) (c) (d) | 30. (a) (b) (c) (d) |

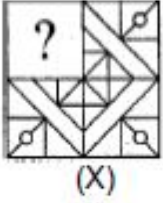




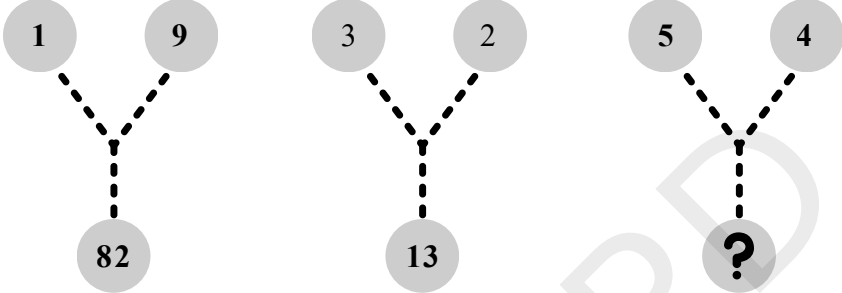
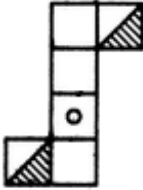




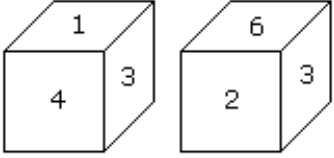
Candidate Sign.



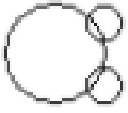
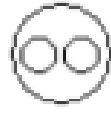





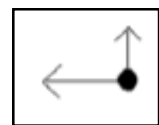
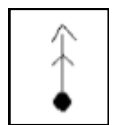
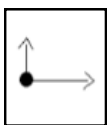


















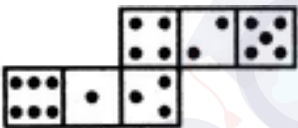
DEFENCE ORIENTED SSB AND PERSONALITY DEVELOPMENT PROGRAM

Name _____ Date _____ Time limit 20 min / 30 Questions

1.	<p>What will be replaced by (?) in following sequence? 28, 33, 40, 51, 64, ? Options: a. 75 b. 77 c. 81 d. 69</p>
2.	<p>What should come next in the following letter sequence? A A B A B C A B C D A B C D E A B C D Options: a. A b. C c. E d. B</p>
3.	<p>If 'Air' is called 'Water', 'Land' is called 'Air', 'Water' is called 'Land' and Swimmer swims on Land, Buffalo lives in Air then where does Airplane fly? Options: a. Land b. Air c. Water d. Space</p>
4.	<p>Mask : _____ :: Pen : Notebook Options: a. Wear b. Protect c. Throw d. Face e. COVID</p>
5.	<p>Complete the series 8, 9, 11, 14, 18 ,23, ... Options: a. 27 b. 37 c. 29 d. 32</p>
6.	<p>Two positions of a dice are shown below. Which number will appear on the face opposite to the face with the number 5?  Options: a. 4 b. 6 c. 3 d. 1</p>
7.	<p>Find the missing Gap KG:APPLE :: _____:BANANA Options: a. Liter b. Money c. Dozen d. Grams</p>
8.	<p>A, B, C, D and E are sitting on a bench. A is sitting next to B, C is sitting next to D, D is not sitting with E who is on the left end of the bench. C is on the second position from the right. A is to the right of B and E. A and C are sitting together. In which position A is sitting ? Options: a. Between C and D c. Between A and E b. Between B and C d. Between E and C</p>

<p>9.</p>	<p>Which figure from options will fill (?) in figure (X)?</p>  <p>Options:</p>     <p>a. b. c. d.</p>
<p>10.</p>	<p>If NOTES is coded as RKKAW, then SHIRT is coded as</p> <p>Options: a. WDERF b. WDKRF c. WDMNX d. WDBVH</p>
<p>11.</p>	<p>Which number replaces the question mark.</p>  <p>Options: a. 29 b. 41 c. 36 d. 21</p>
<p>12.</p>	<p>Choose the die that is similar to the die, formed from the open die.</p>      <p>(X) (1) (2) (3) (4)</p> <p>Options: a. Only 1 b. Only 2 c. 1 and 3 d. 1, 2 and 3</p>
<p>13.</p>	<p>Two positions of a cubical block are shown. When 5 is at the top which number will be at bottom?</p>  <p>Options: a. 1 b. 2 c. 3 d. 4</p>
<p>14.</p>	<p>Find the odd one out 3, 5, 11, 14, 17, 21</p> <p>Options: a. 21 b. 17 c. 14 d. 3</p>

<p>15.</p>	<p>Which of the following diagrams indicates the best relation between Factory, Product and Machinery ?</p> <p>Options:</p> <div style="display: flex; justify-content: space-around;"> <div style="text-align: center;"> <p>a. </p> </div> <div style="text-align: center;"> <p>c. </p> </div> </div> <div style="display: flex; justify-content: space-around;"> <div style="text-align: center;"> <p>b. </p> </div> <div style="text-align: center;"> <p>d. </p> </div> </div>												
<p>16.</p>	<p>8, 27, 64, 100, 216, 343. Find the Odd Man Out.</p> <p>Options: a. 27 b. 100 c. 125 d. 343</p>												
<p>17.</p>	<p>HUMAN: LIP :: BIRD : ____ Fill the blank.</p> <p>Options: a. BUSH b. GRASS c. FOREST d. BEAK</p>												
<p>18.</p>	<p>10, 25, 45, 70, 100, ____ Fill the Blank.</p> <p>Options: a. 155 b. 135 c. 120 d. 125</p>												
<p>19.</p>	<p>A father said to his son, "I was as old as you are at the present at the time of your birth". If the father's age is 38 years now, the son's age five years back was:</p> <p>Options: a. 14 years b. 19 years c. 33 years d. 38 years</p>												
<p>20.</p>	<p>What will be filled in (?)</p> <div style="margin-bottom: 10px;"> <table border="1" style="display: inline-table; border-collapse: collapse;"> <tr> <td style="padding: 2px 10px;">5</td> <td style="padding: 2px 10px;">4</td> <td style="padding: 2px 10px;">7</td> <td style="padding: 2px 10px;">8</td> </tr> </table> </div> <div style="margin-bottom: 10px;"> <table border="1" style="display: inline-table; border-collapse: collapse;"> <tr> <td style="padding: 2px 10px;">6</td> <td style="padding: 2px 10px;">9</td> <td style="padding: 2px 10px;">5</td> <td style="padding: 2px 10px;">10</td> </tr> </table> </div> <div style="margin-bottom: 10px;"> <table border="1" style="display: inline-table; border-collapse: collapse;"> <tr> <td style="padding: 2px 10px;">3</td> <td style="padding: 2px 10px;">7</td> <td style="padding: 2px 10px;">2</td> <td style="padding: 2px 10px;">?</td> </tr> </table> </div> <p>Options: a. 1 b. 4 c. 3 d. 6</p>	5	4	7	8	6	9	5	10	3	7	2	?
5	4	7	8										
6	9	5	10										
3	7	2	?										
<p>21.</p>	<p>Figure:6 :: Car : ____</p> <p>Options: a. 2 b. 4 c. 3 d. 1</p>												
<p>22.</p>	<p>Find the next term</p> <p>1,5,14,30,____</p> <p>Options: a. 46 b. 36 c. 55 d. 96</p>												
<p>23.</p>	<p>Find the next figure.</p> <div style="margin-bottom: 20px;"> <table border="1" style="border-collapse: collapse; text-align: center;"> <tr> <td style="padding: 10px;"></td> <td style="padding: 10px;"></td> <td style="padding: 10px;"></td> <td style="padding: 10px;"></td> <td style="padding: 10px;"></td> </tr> </table> </div> <p>Options:</p> <div style="display: flex; justify-content: space-around; align-items: flex-start;"> <div style="text-align: center;"> <table border="1" style="border-collapse: collapse;"> <tr> <td style="padding: 10px;"></td> </tr> </table> <p>a.</p> </div> <div style="text-align: center;"> <table border="1" style="border-collapse: collapse;"> <tr> <td style="padding: 10px;"></td> </tr> </table> <p>b.</p> </div> <div style="text-align: center;"> <table border="1" style="border-collapse: collapse;"> <tr> <td style="padding: 10px;"></td> </tr> </table> <p>c.</p> </div> <div style="text-align: center;"> <p>d. None of These.</p> </div> </div>												
													
													
													
													

24.	<p>Animal is to MEAT then earth is to _____ Options: a. Heart b. Paper c. Minerals d. Cloth</p>																	
25.	<p>By how many degrees a minute hand rotates in 45 minutes? Options: a. 45 degrees b. 180 degrees c. 270 degrees d. 90 degrees</p>																	
26.	<p>Smallest number from the following given is: Options: a. 459858 b. 458896 c. 4500142 d.453014</p>																	
27.	<p>Analyse and choose appropriate option India has 21 states and 8 union territories making total of 29 states and UT's. Options: a. Given statement is TRUE b. Given statement is FALSE c. Given statement changes every year d. None of these</p>																	
28.	<p>Fill the box (?) with appropriate option box</p> <table border="1" style="display: inline-table; margin-right: 20px;"> <tr><td></td><td></td><td></td></tr> <tr><td></td><td></td><td></td></tr> <tr><td></td><td></td><td>?</td></tr> </table> <table border="1" style="display: inline-table;"> <tr><td></td><td></td><td></td><td></td></tr> <tr><td>(1)</td><td>(2)</td><td>(3)</td><td>(4)</td></tr> </table> <p>Options: a. 1 b. 2 c. 3 d. 4</p>									?					(1)	(2)	(3)	(4)
		?																
(1)	(2)	(3)	(4)															
29.	<p>How many dots lie opposite to the face having three dots, when the given figure is folded to form a cube?</p>  <p>Options: a. 2 b. 4 c. 5 d. 6</p>																	
30.	<p>Consider following statements: If $1+1 = 11$ and $2+2 = 22$ then, $7+7 = \underline{\quad}$ Options: a. 14 b. 70 c. 77 d. 49</p>																	



To access solutions please browse through the following pdf of solution: <http://oir-list.colonelvyas.org>.

For more mock tests of SSB : SSB.COLONELVYAS.ORG